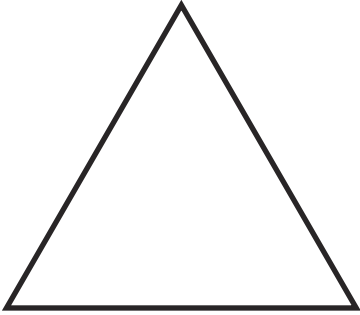



Properties of 2D Shapes


Write down the properties of these shapes.




What are the properties of an equilateral triangle?



What are the properties of a rectangle?



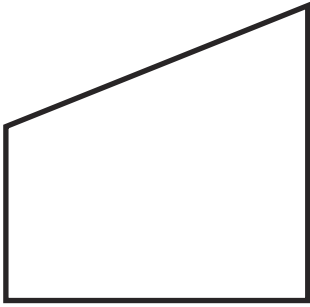
What are the properties of a square?




What are the properties of a circle?

Properties of 2D Shapes

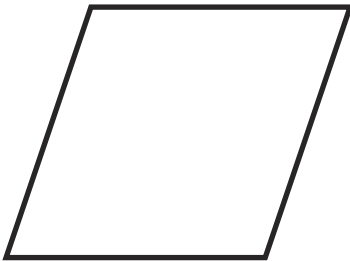
Write down the properties of these shapes.



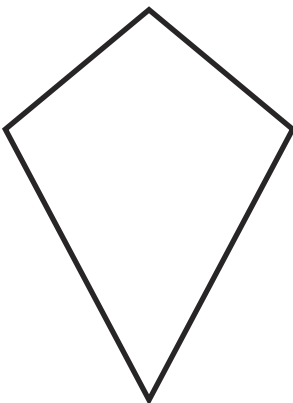
What are the properties of a quadrilateral?



What are the properties of an isosceles triangle?



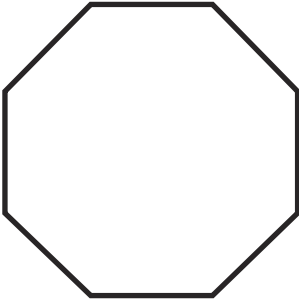
What are the properties of a parallelogram?



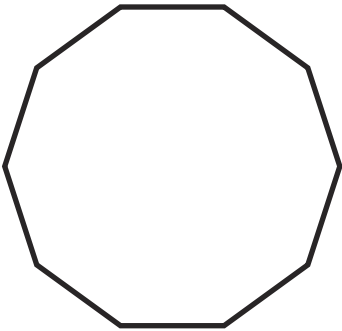
What are the properties of a kite?

Properties of 2D Shapes

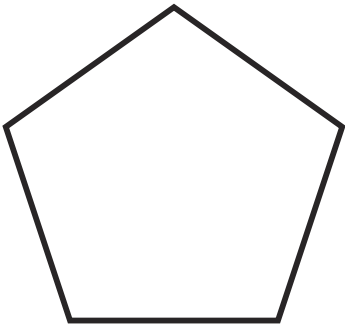
Write down the properties of these shapes.



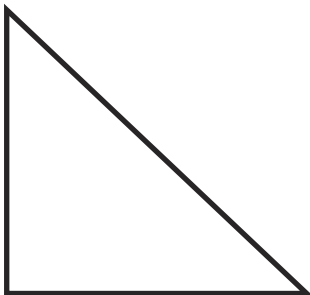
What are the properties of an octagon?



What are the properties of a decagon?



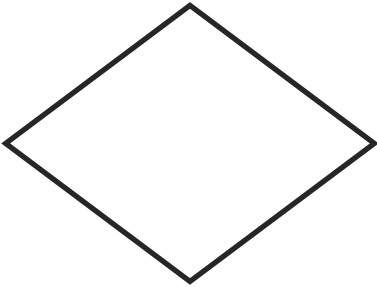
What are the properties of a pentagon?



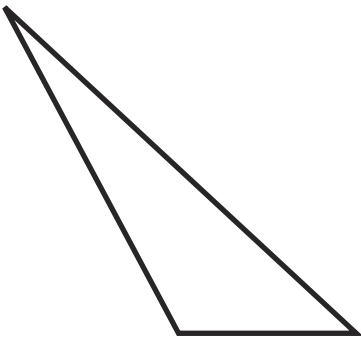
What are the properties of a right-angled triangle?

Properties of 2D Shapes

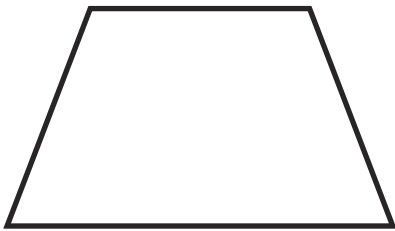
Write down the properties of these shapes.



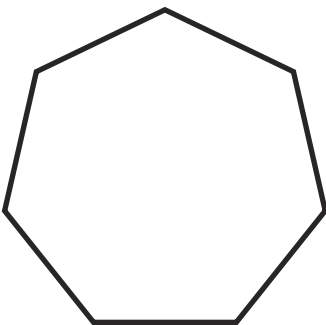
What are the properties of a rhombus?



What are the properties of a scalene triangle?



What are the properties of a trapezium?



What are the properties of a heptagon?
